



Add the coins and put the cents sign in.

1.  = _____

2.  = _____

3.  = _____

4.  = _____


5.  = _____

6.  = _____

7.  = _____

8.  = _____

9.  = _____

10.  = _____