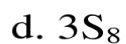


Name \_\_\_\_\_ Date \_\_\_\_\_ Period \_\_\_\_\_

Unit 10b: Chemical Equations  
Nomenclature and Balancing Equations Practice Worksheet

I. For each chemical formula, list the number of each of the element(s) in it.

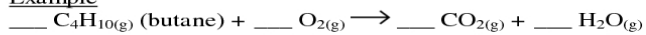


II. For each of the following formula equations...

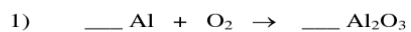
- Balance the equations. Write the coefficients on the lines provided.
- Write the formula equation as a word equation

2 points each.

Example



b. Butane burns with oxygen gas to form carbon dioxide gas and water vapor.



a.

b. \_\_\_\_\_

\_\_\_\_\_

\_\_\_\_\_

