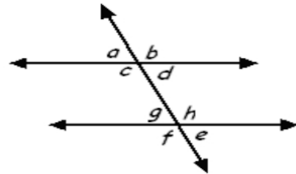


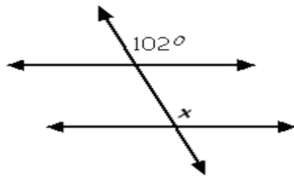
Parallel lines and a transversal

Use the following diagram for exercises 1 - 3.

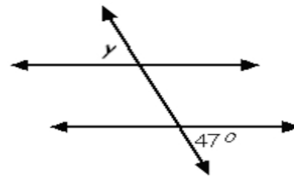


- 1.) Name a pair of alternate interior angles.
- 2.) Name a pair of corresponding angles.
- 3.) Name a pair of alternate exterior angles.

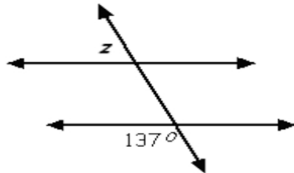
4.) Find the value of x .



5.) Find the value of y .



6.) Find the value of z .



7.) Find the value of w .

