



Volume & Capacity

Measuring capacity in millilitres.


Print

Name: _____


Colour to fill each measuring jug to the levels indicated below.



500ml



750ml

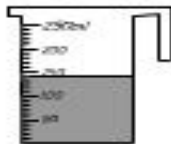


250ml



1000ml

How many millilitres of liquid are in each of these measuring cups?



_____ ml



_____ ml

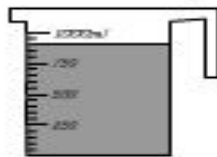


_____ ml



_____ ml

How much liquid is needed to fill each jug to 1 litre?



1000 ml -

_____ ml




1000 ml -

_____ ml



1000 ml -

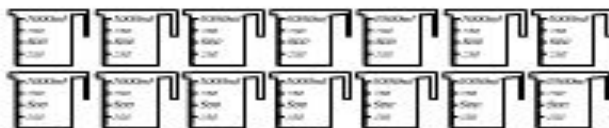
_____ ml



1000 ml -

_____ ml

Colour the amount needed to fill the bucket.



How many 250ml measuring cups would be needed to fill the bucket?

Score _____

