



## Volume & Capacity

Measuring capacity in millilitres.


Print

Name: \_\_\_\_\_

Colour to fill each measuring jug to the levels indicated below.



500ml



750ml

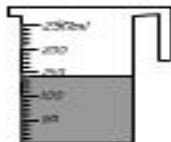


250ml



1000ml

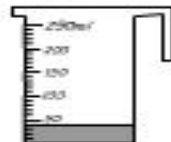
How many millilitres of liquid are in each of these measuring cups?



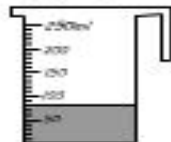
\_\_\_\_\_ ml



\_\_\_\_\_ ml

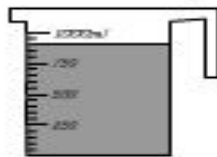


\_\_\_\_\_ ml



\_\_\_\_\_ ml

How much liquid is needed to fill each jug to 1 litre?



1000 ml -

\_\_\_\_\_ ml




1000 ml -

\_\_\_\_\_ ml



1000 ml -

\_\_\_\_\_ ml



1000 ml -

\_\_\_\_\_ ml

Colour the amount needed to fill the bucket.



How many 250ml measuring cups would be needed to fill the bucket?

Score \_\_\_\_\_

