
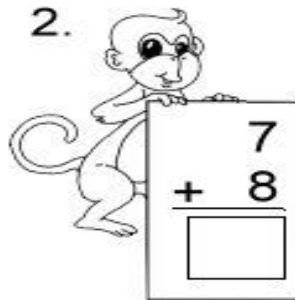


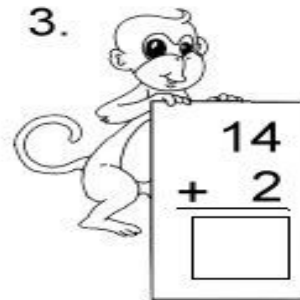
Name: _____

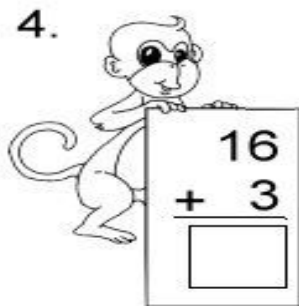
Addition up to 20

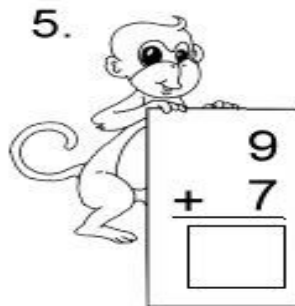
Add the numbers, and write the answer in the box.

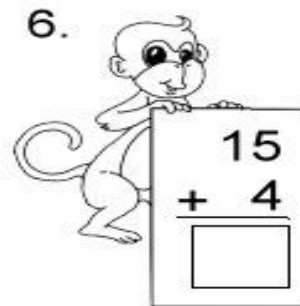
1. 
$$\begin{array}{r} 12 \\ + 5 \\ \hline \end{array}$$

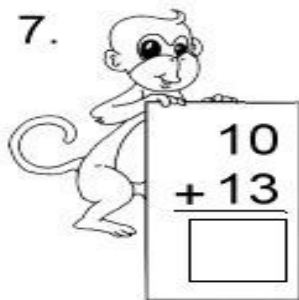
2. 
$$\begin{array}{r} 7 \\ + 8 \\ \hline \end{array}$$

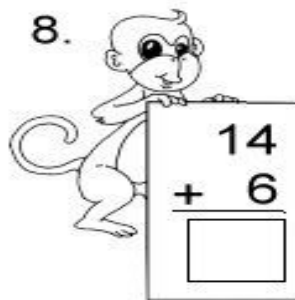
3. 
$$\begin{array}{r} 14 \\ + 2 \\ \hline \end{array}$$

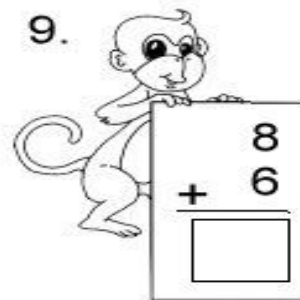
4. 
$$\begin{array}{r} 16 \\ + 3 \\ \hline \end{array}$$

5. 
$$\begin{array}{r} 9 \\ + 7 \\ \hline \end{array}$$

6. 
$$\begin{array}{r} 15 \\ + 4 \\ \hline \end{array}$$

7. 
$$\begin{array}{r} 10 \\ + 13 \\ \hline \end{array}$$

8. 
$$\begin{array}{r} 14 \\ + 6 \\ \hline \end{array}$$

9. 
$$\begin{array}{r} 8 \\ + 6 \\ \hline \end{array}$$