

Name : \_\_\_\_\_

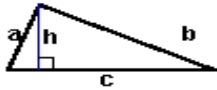
Score : \_\_\_\_\_

Teacher : \_\_\_\_\_

Date : \_\_\_\_\_

**Identify and Calculate the Area and Perimeter for each Triangle.**

1)



$a = 4.27 \text{ ft}$     $b = 9.21 \text{ ft}$   
 $c = 9.8 \text{ ft}$     $h = 4 \text{ ft}$

Area: \_\_\_\_\_

Perimeter: \_\_\_\_\_

Type: \_\_\_\_\_

2)



$a = 7.4 \text{ inches}$     $b = 4.8 \text{ inches}$   
 $c = 8.82 \text{ inches}$

Area: \_\_\_\_\_

Perimeter: \_\_\_\_\_

Type: \_\_\_\_\_

3)



$a = 5.71 \text{ mm}$     $b = 8.49 \text{ mm}$   
 $c = 8.4 \text{ mm}$     $h = 5.4 \text{ mm}$

Area: \_\_\_\_\_

Perimeter: \_\_\_\_\_

Type: \_\_\_\_\_

4)



$s = 5.9 \text{ yds}$

Area: \_\_\_\_\_

Perimeter: \_\_\_\_\_

Type: \_\_\_\_\_

5)



$a = 8.6 \text{ ft}$     $b = 4.3 \text{ ft}$   
 $c = 9.62 \text{ ft}$

Area: \_\_\_\_\_

Perimeter: \_\_\_\_\_

Type: \_\_\_\_\_

6)



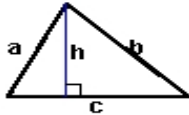
$a = 4.5 \text{ cm}$     $b = 6.4 \text{ cm}$

Area: \_\_\_\_\_

Perimeter: \_\_\_\_\_

Type: \_\_\_\_\_

7)



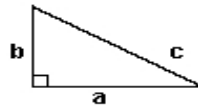
$a = 6.33 \text{ yds}$     $b = 8.16 \text{ yds}$   
 $c = 8.6 \text{ yds}$     $h = 5.7 \text{ yds}$

Area: \_\_\_\_\_

Perimeter: \_\_\_\_\_

Type: \_\_\_\_\_

8)



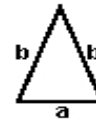
$a = 8.2 \text{ cm}$     $b = 5 \text{ cm}$   
 $c = 9.6 \text{ cm}$

Area: \_\_\_\_\_

Perimeter: \_\_\_\_\_

Type: \_\_\_\_\_

9)



$a = 4 \text{ inches}$     $b = 6.7 \text{ inches}$

Area: \_\_\_\_\_

Perimeter: \_\_\_\_\_

Type: \_\_\_\_\_