



What's the angle?

1. Name each angle


2. Measure these angles using a protractor. The first one is done for you.




a 90°
Right angle



b _____




c _____



d _____



e _____



f _____



g _____




h _____



i _____



j _____



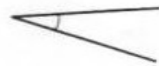
k _____



l _____



m _____



n _____



o _____
