



Name: \_\_\_\_\_

Can you tell the time to the nearest 5 minutes?  
Worksheet 1


1



2




3



4



5



6




7




8



9



10



11



12

