


Name: _____

Analog Time


Draw the analog clock hands to match each digital time.

1.




3:15

2.




6:45

3.



10:15

4.



12:45

5.




1:15

6.




10:45

7.



3:45

8.



7:15