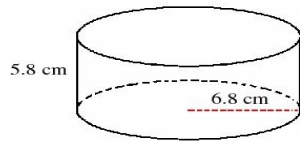


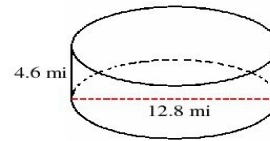
Volume and Surface Area of Cylinders (A)

Instructions: Find the volume and surface area for each cylinder.

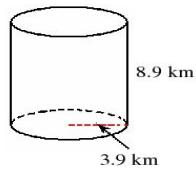
1)



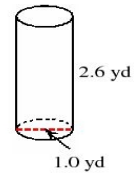
2)



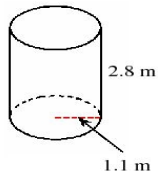
3)



4)



5)



6)

