



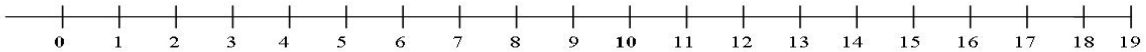
Name: _____

CCSS 2.OA.2 Fluently add and subtract within 20 using mental strategies.....

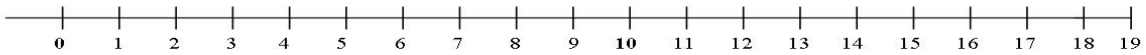
Count Back to Subtract

Directions: Use the number line below to count back to subtract. Show your work on the number line.

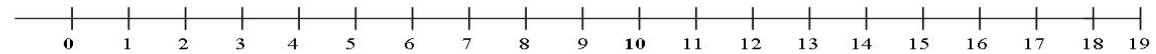
1) $14 - 5 = \underline{\quad}$



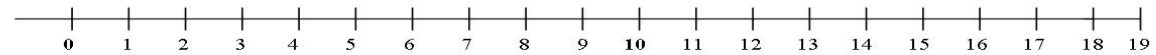
2) $9 - 3 = \underline{\quad}$



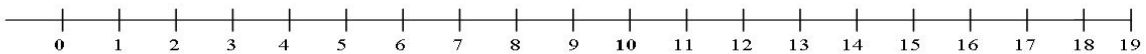
3) $12 - 8 = \underline{\quad}$



4) $18 - 9 = \underline{\quad}$



5) $7 - 4 = \underline{\quad}$



____ I double checked my work.