

Name : _____

Score : _____

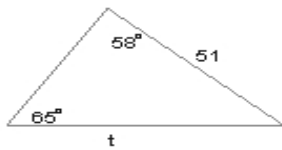
Teacher : _____

Date : _____

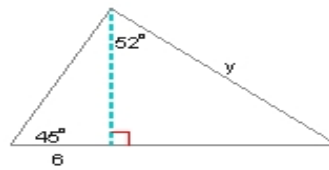
Multi-Step Problems

Find the variable side. Round the intermediate and final values to the nearest tenth.

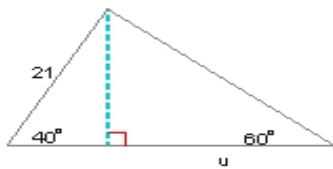
1) $t =$ _____



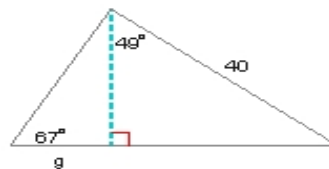
2) $y =$ _____



3) $u =$ _____

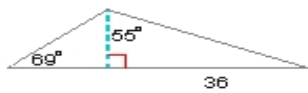


4) $g =$ _____



Find the area of each triangle. Round the intermediate and final values to the nearest tenth.

5) Area = _____



6) Area = _____

