

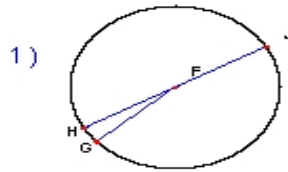
Name : \_\_\_\_\_

Score : \_\_\_\_\_

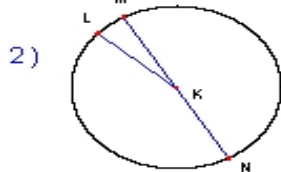
Teacher : \_\_\_\_\_

Date : \_\_\_\_\_

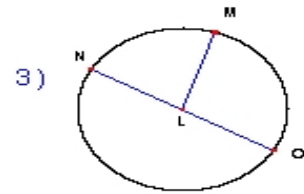
Solve the missing elements for each problem. Use 3.14 for Pi.



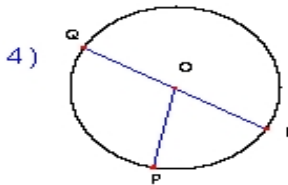
Radius: \_\_\_\_\_  
Diameter: 22 inches  
Circumference: \_\_\_\_\_  
Area: \_\_\_\_\_



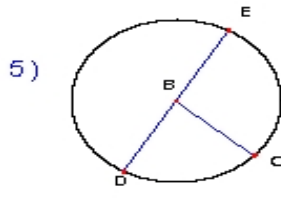
Radius: \_\_\_\_\_  
Diameter: 6 ft  
Circumference: \_\_\_\_\_  
Area: \_\_\_\_\_



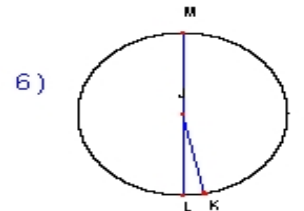
Radius: 19 yards  
Diameter: \_\_\_\_\_  
Circumference: \_\_\_\_\_  
Area: \_\_\_\_\_



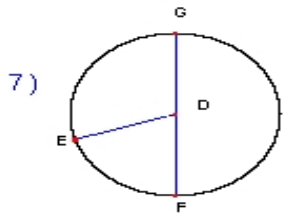
Radius: \_\_\_\_\_  
Diameter: 24 cm  
Circumference: \_\_\_\_\_  
Area: \_\_\_\_\_



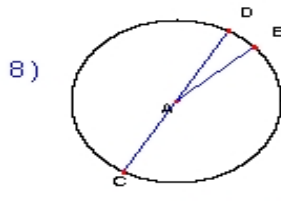
Radius: \_\_\_\_\_  
Diameter: 4 mm  
Circumference: \_\_\_\_\_  
Area: \_\_\_\_\_



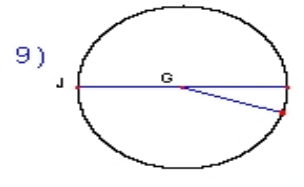
Radius: \_\_\_\_\_  
Diameter: 16 inches  
Circumference: \_\_\_\_\_  
Area: \_\_\_\_\_



Radius: 10 ft  
Diameter: \_\_\_\_\_  
Circumference: \_\_\_\_\_  
Area: \_\_\_\_\_



Radius: 20 yards  
Diameter: \_\_\_\_\_  
Circumference: \_\_\_\_\_  
Area: \_\_\_\_\_



Radius: 5 cm  
Diameter: \_\_\_\_\_  
Circumference: \_\_\_\_\_  
Area: \_\_\_\_\_