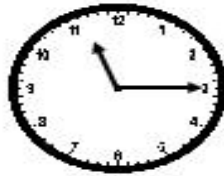


Name: _____

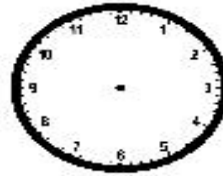
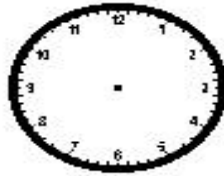
Monday

Math Practice: Tell and write time to the nearest minute (3.MD.1)
Measure time intervals in minutes

Write the time displayed on each clock.



Draw the time on each clock to the nearest minute.



Use the number line to help you solve each problem. Write your answer in the blank.

Candice and her mom are going to a poetry reading at the local library. The poetry reading will last 35 minutes. If the poetry reading starts at 6:10 p.m., what time will the poetry reading end?



Ava finished her homework at 5:15 p.m. She worked on her homework for 45 minutes. What time did Ava start her homework?

