

Print

Perimeter

Name: _____

Measure each side to the nearest cm.
Calculate the perimeter of these shapes:



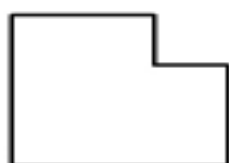
____ cm



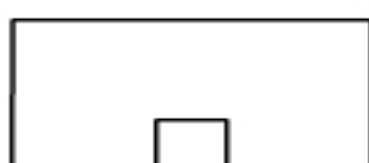
____ cm



____ cm



____ cm



____ cm




____ cm



____ cm



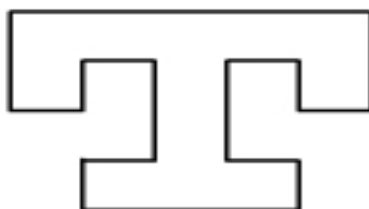
____ cm



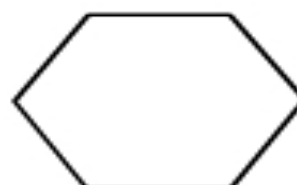
____ cm



____ cm



____ cm



____ cm