







Name: _____

Wednesday

Math Practice: Recognize and draw shapes (2.G.1)

Name the shape.

| | | |
|---|---|---|
|  _____ Number of sides: _____ Number of angles: _____ Objects I have seen: |  _____ Number of sides: _____ Number of angles: _____ Objects I have seen: |  _____ Number of sides: _____ Number of angles: _____ Objects I have seen: |
|  _____ Number of sides: _____ Number of angles: _____ Objects I have seen: |  _____ Number of sides: _____ Number of angles: _____ Objects I have seen: |  _____ Number of sides: _____ Number of angles: _____ Objects I have seen: |