

Name _____

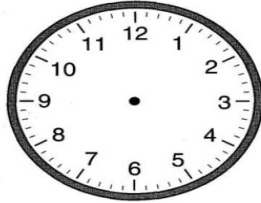
CCSS 2.MD.7 Tell and write time from analog and digital clocks to the nearest...

Telling Time

→ Directions: Draw in the minute and hour hands to match the digital time.




5:30



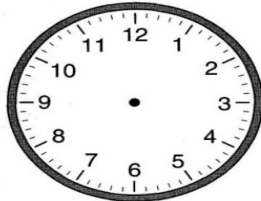
11:30



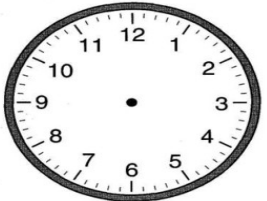
8:30



10:30



1:30



6:30



3:30



12:30



9:30

