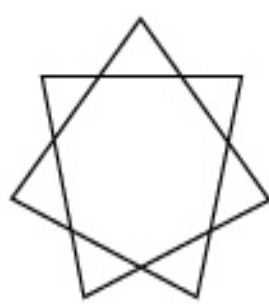




$$\left\{ \frac{5}{2} \right\}$$



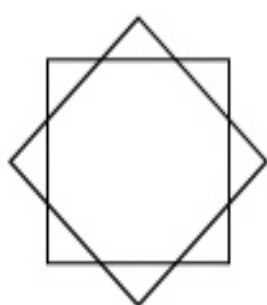
$$\left\{ \frac{6}{2} \right\}$$



$$\left\{ \frac{7}{2} \right\}$$



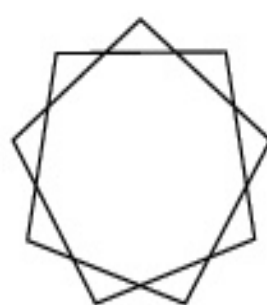
$$\left\{ \frac{7}{3} \right\}$$



$$\left\{ \frac{8}{2} \right\}$$



$$\left\{ \frac{8}{3} \right\}$$



$$\left\{ \frac{9}{2} \right\}$$



$$\left\{ \frac{9}{3} \right\}$$



$$\left\{ \frac{9}{4} \right\}$$



$$\left\{ \frac{10}{3} \right\}$$



$$\left\{ \frac{12}{5} \right\}$$