

Name: \_\_\_\_\_ Date: \_\_\_\_\_ Number: \_\_\_\_\_

# Everyday Math Unit 8 Review

1. Draw a line to match the words with the fractions to the pictures:

One Half

$\frac{2}{3}$

Two Thirds

$\frac{1}{3}$

Two Fourths





$\frac{1}{2}$

Three Thirds


$\frac{2}{4}$

One Third

$\frac{3}{3}$




2. Fill in the bubble to mark your answer:



$\frac{1}{3}$

$\frac{1}{4}$

$\frac{2}{4}$



$\frac{2}{6}$

$\frac{1}{3}$

$\frac{1}{4}$

Created by Amanda Olson