

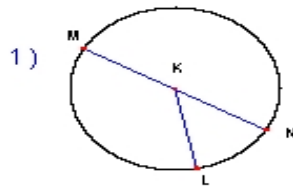
Name : _____

Score : _____

Teacher : _____

Date : _____

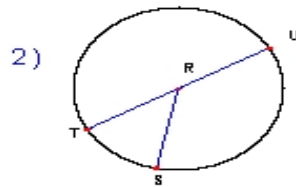
Identify the elements for each problem.



Circle: _____

Radius: _____

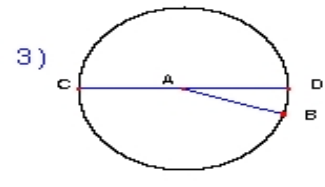
Diameter: _____



Circle: _____

Radius: _____

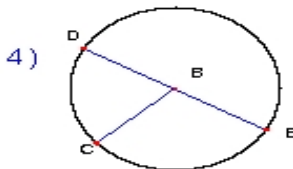
Diameter: _____



Circle: _____

Radius: _____

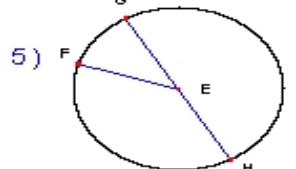
Diameter: _____



Circle: _____

Radius: _____

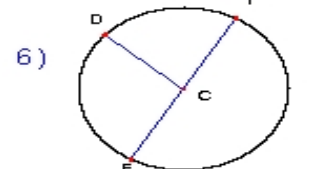
Diameter: _____



Circle: _____

Radius: _____

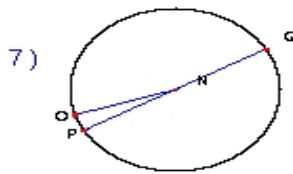
Diameter: _____



Circle: _____

Radius: _____

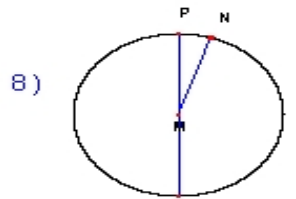
Diameter: _____



Circle: _____

Radius: _____

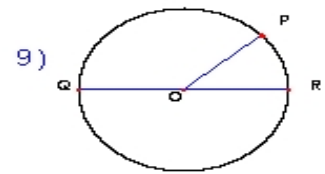
Diameter: _____



Circle: _____

Radius: _____

Diameter: _____



Circle: _____

Radius: _____

Diameter: _____