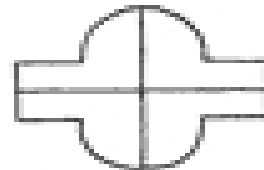
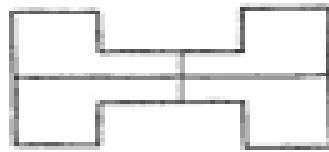


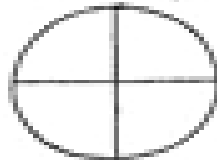


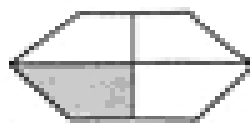
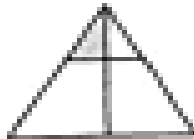

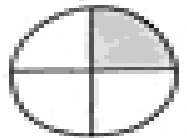

Quarters



Color one quarter ($\frac{1}{4}$) of each shape.



Write a ✓ in the box if $\frac{1}{4}$ of the figure is shaded and a ✗ if less than $\frac{1}{4}$ is shaded.



Color one quarter ($\frac{1}{4}$) of each picture.

