


Write each missing number.

1




3




5

6



8




10

11



13



15

16



18



20

21




23




25

26



28



30