


Directions: Solve the equations to find the perimeter of each shape.

1.



4.




2.




5.



3.



6.



Directions: Using a ruler, draw a polygon that has a perimeter of 167 mm.

