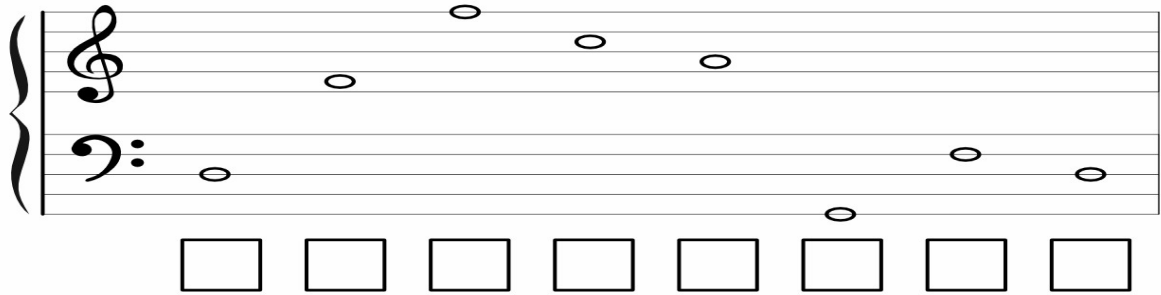


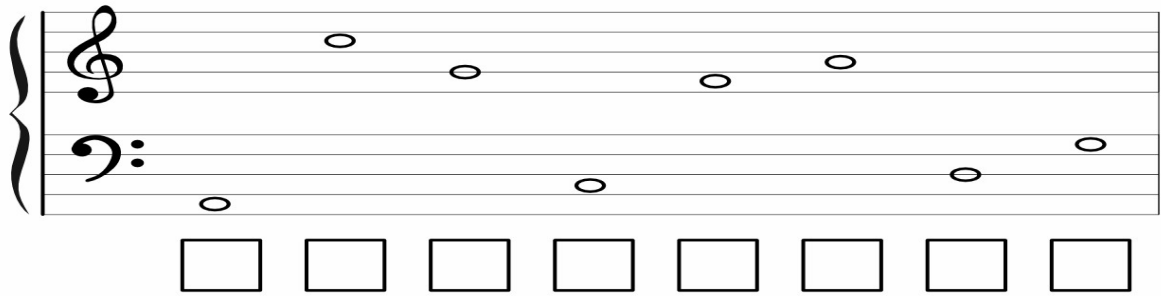
Name \_\_\_\_\_ Date \_\_\_\_\_

# Sight-Reading Sheet

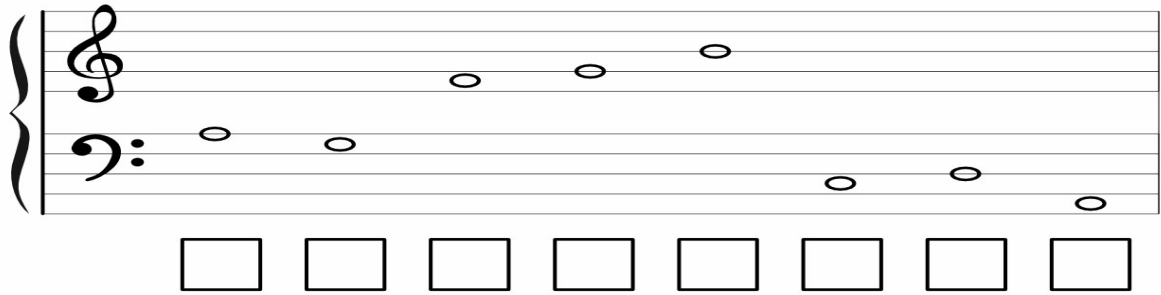
Write the name of each note below!



A musical staff with a treble clef and a bass clef. The treble clef staff contains notes on the 2nd, 3rd, 4th, and 5th lines. The bass clef staff contains notes on the 1st, 3rd, and 5th lines. Below the staff are eight empty square boxes for labeling the notes.



A musical staff with a treble clef and a bass clef. The treble clef staff contains notes on the 1st, 2nd, 4th, and 5th lines. The bass clef staff contains notes on the 1st, 3rd, and 5th lines. Below the staff are eight empty square boxes for labeling the notes.



A musical staff with a treble clef and a bass clef. The treble clef staff contains notes on the 2nd, 3rd, and 4th lines. The bass clef staff contains notes on the 1st, 2nd, 4th, and 5th lines. Below the staff are eight empty square boxes for labeling the notes.