

Name \_\_\_\_\_

DATE \_\_\_\_\_

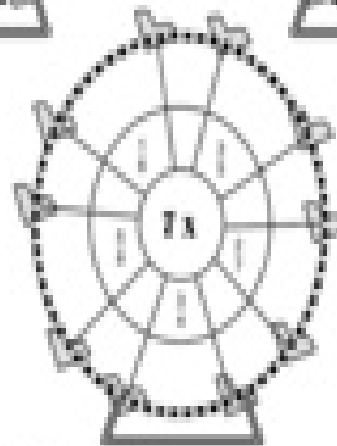
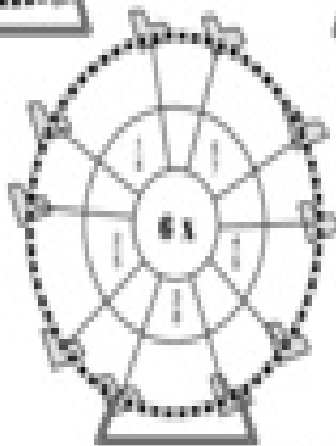
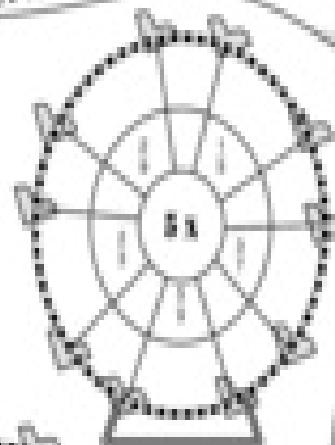
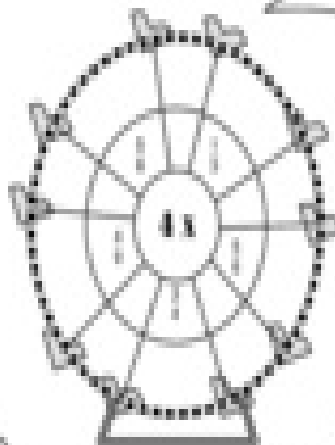
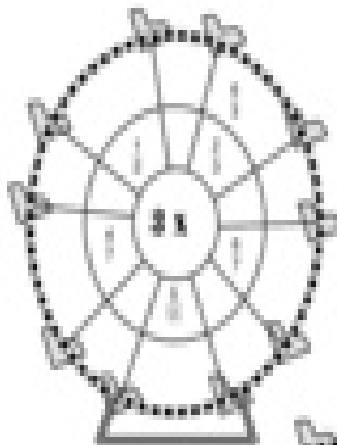
DATE \_\_\_\_\_

MULTIPLYING FRACTIONS BY WHOLE NUMBERS

## FERRIS WHEEL FRACTIONS

Multiply the number in the center of each Ferris wheel by the fraction on each section.  
Write the answer in the outer section as shown.

EXAMPLE: Multiply the numbers in the inner circle of the "3 x" Ferris wheel by 3. Then multiply them by 6.



©2010 MATHS WORKSHEETS.COM

