

Name _____

DATE _____

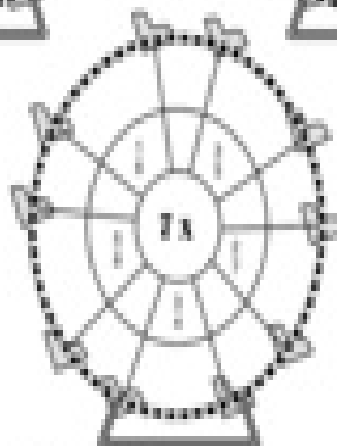
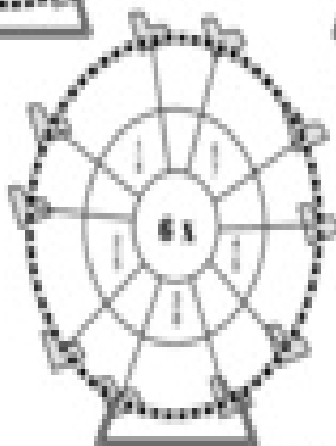
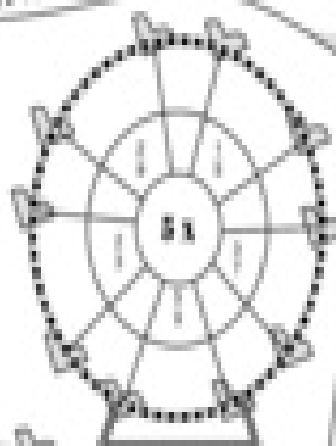
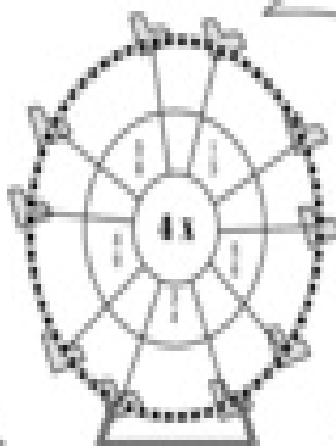
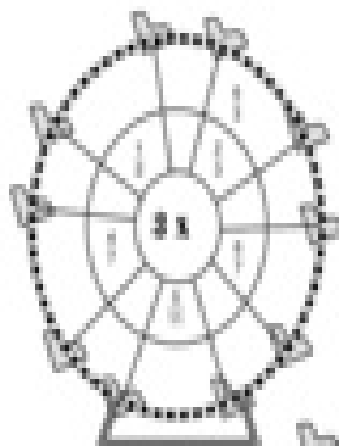
DATE _____

FERRIS WHEEL FRACTIONS

MULTIPLYING FRACTIONS BY WHOLE NUMBERS

Multiply the number in the center of each Ferris wheel
by the fraction on each section.
Write the answer in the outer section as shown.

EXAMPLE: Multiply the fractions on the inner circle of the
"3 x" Ferris wheel by 3. Then multiply them by 6.



©2014 MATHS WORKSHEETS.COM

