

Name _____

DATE _____

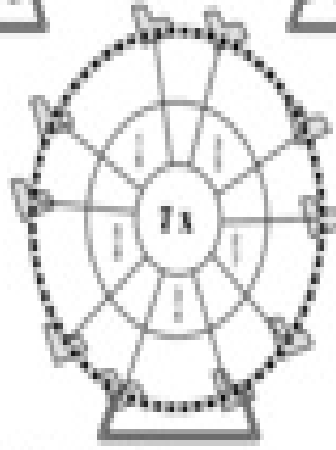
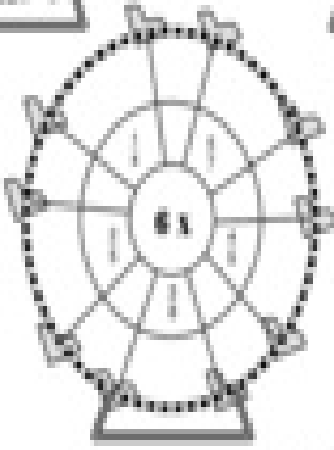
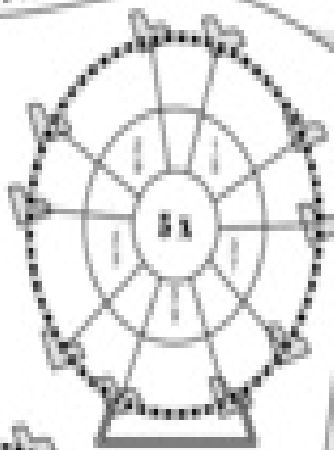
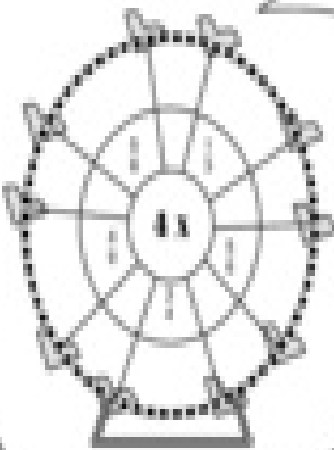
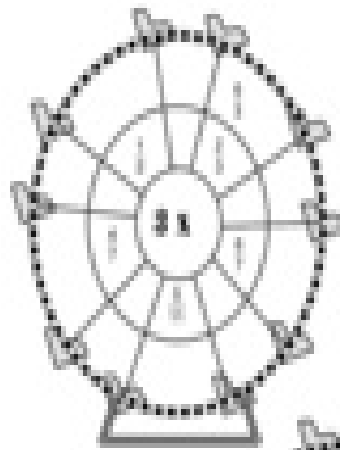
DATE _____

MULTIPLYING FRACTIONS BY WHOLE NUMBERS

FERRIS WHEEL FRACTIONS

Multiply the number in the center of each Ferris wheel by the fraction on each section. Write the answer in the outer section as shown.

EXAMPLE: Multiply the numbers in the inner circle of the "3 x" Ferris wheel by 3. Then multiply them by 6.



©2008 Marshall Cavendish International (Singapore) Private Limited

