

Name : \_\_\_\_\_

Score : \_\_\_\_\_

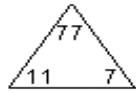
Teacher : \_\_\_\_\_

Date : \_\_\_\_\_

---

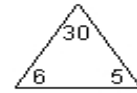
**Complete Each Family of Facts**

1)



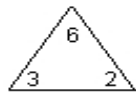
$$\begin{array}{l} \square \times \square = \square \\ \square \times \square = \square \\ \square \div \square = \square \\ \square \div \square = \square \end{array}$$

4)



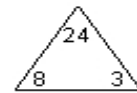
$$\begin{array}{l} \square \times \square = \square \\ \square \times \square = \square \\ \square \div \square = \square \\ \square \div \square = \square \end{array}$$

2)



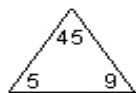
$$\begin{array}{l} \square \times \square = \square \\ \square \times \square = \square \\ \square \div \square = \square \\ \square \div \square = \square \end{array}$$

5)



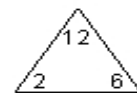
$$\begin{array}{l} \square \times \square = \square \\ \square \times \square = \square \\ \square \div \square = \square \\ \square \div \square = \square \end{array}$$

3)



$$\begin{array}{l} \square \times \square = \square \\ \square \times \square = \square \\ \square \div \square = \square \\ \square \div \square = \square \end{array}$$

6)



$$\begin{array}{l} \square \times \square = \square \\ \square \times \square = \square \\ \square \div \square = \square \\ \square \div \square = \square \end{array}$$

