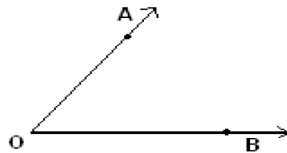


Student Name: _____

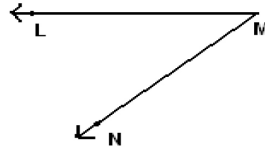
Score: _____

Vertex and Sides Formed by Angles

Name the vertex and sides formed by the angles:



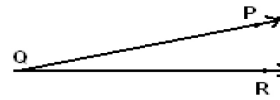
Vertex: _____ Sides: _____



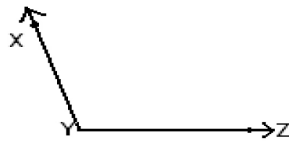
Vertex: _____ Sides: _____



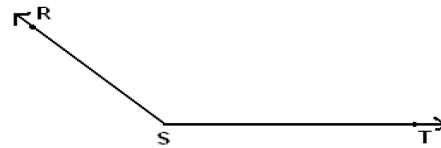
Vertex: _____ Sides: _____



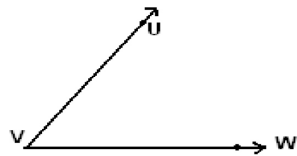
Vertex: _____ Sides: _____



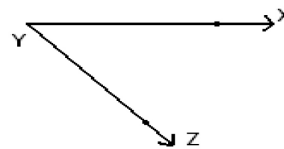
Vertex: _____ Sides: _____



Vertex: _____ Sides: _____



Vertex: _____ Sides: _____



Vertex: _____ Sides: _____