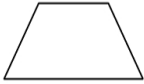
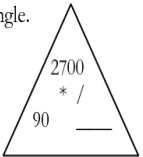


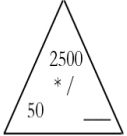
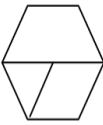


Grade 4 Everyday Math Calendar for March

<p>How many days are there in 20 weeks?</p> <p>How many weeks are there in 105 days?</p>	<p>Write these fractions in order from smallest to largest.</p> <p>$1/4, 1/2, 1/9, 1/3, 1/5$</p>	<p>I have five sticker albums. Each album has 25 stickers in it. How many stickers do I have in all?</p>	<p>Divide the trapezoid into thirds. Color $2/3$ of the trapezoid</p> 	<p>Complete the *, / fact triangle.</p> 												
<p>Complete with $>, <, =$</p> <p>$10 \overset{(3)}{\text{_____}} 1,000$</p> <p>$5,400,000 \text{_____} 54 \text{ million}$</p> <p>$10 \overset{(4)}{\text{_____}} 100,000$</p> <p>$63,000,000 \text{_____} 63 \text{ billion}$</p>	<p>Draw a right angle. Label it $\angle ABC$.</p>	<p>Divide the two rectangles into fourths. Color $1 \frac{1}{4}$ of the rectangles.</p> 	<p>Complete the *, / fact triangle.</p> 	<p>Divide by any method writing the answer as a mixed number.</p> <p>$29 \div 3 =$</p> <p>$887 \div 10 =$</p> <p>$257 \div 7 =$</p>												
<p>Multiply the numbers $53 * 49$, using lattice multiplication.</p>	<p>How many degrees are there in:</p> <p>$1/4$ turn?</p> <p>$1/3$ turn?</p> <p>$1/12$ turn?</p>	<p>Complete the *, / fact triangle.</p> 	<p>What city is 40° North latitude and 75° West longitude?</p> <p>What city is 2° South latitude and 34° East longitude?</p>	<p>Interpreting Remainders</p> <p>The fourth grade is buying boxes to store 318 books. Each box will hold 12 books. How many boxes are needed to store all the books?</p>												
<p>Label each fraction of the hexagon.</p> 	<p>For each fraction write three equivalent fractions.</p> <p>$1/2$</p> <p>$2/3$</p> <p>$1/4$</p>	<table border="1" style="width: 100%; border-collapse: collapse; text-align: center;"> <thead> <tr> <th style="padding: 2px;">In</th> <th style="padding: 2px;">Out</th> </tr> </thead> <tbody> <tr> <td style="padding: 2px;">2</td> <td style="padding: 2px;">12</td> </tr> <tr> <td style="padding: 2px;">12</td> <td style="padding: 2px;">72</td> </tr> <tr> <td style="padding: 2px;">30</td> <td style="padding: 2px;"></td> </tr> <tr> <td style="padding: 2px;"></td> <td style="padding: 2px;">4200</td> </tr> <tr> <td style="padding: 2px;">90</td> <td style="padding: 2px;"></td> </tr> </tbody> </table> <p>Complete the table.</p>	In	Out	2	12	12	72	30			4200	90		<p>Draw a reflex angle. Label it $\angle XYZ$.</p>	<p>I am thinking of a mystery number. If I divide it by 30 the answer is 700. What is the mystery number?</p>
In	Out															
2	12															
12	72															
30																
	4200															
90																

Be careful with your work and remember to keep practicing those math facts.

Please note: If any of these activities are too difficult or too easy for your child, consider *modifying or adjusting the numbers*. Parent's signature: _____