








**180. Identify and count shapes** **Page 1**  
**Worksheet** **Worksheet**

Look carefully at some 3-D shapes and fill in the spaces in the table below:

Shape Name	Shape Picture	Number of Edges/Faces	Number of Vertices/Corners (including hidden)	Number of Edges/Faces	Number of Edges/Faces
Cube		0	0	0	0
Cuboid					
Triangular Prism					
Rectangular Prism					
Cylindrical Prism					
Square Based Pyramid					
Triangular Pyramid					
Octahedron	