


Name \_\_\_\_\_


Date \_\_\_\_\_

### Multiplication Arrays


Directions: Use the array to find the product.




$3 \times 4 =$  \_\_\_\_\_




$5 \times 5 =$  \_\_\_\_\_




$2 \times 9 =$  \_\_\_\_\_



$4 \times 10 =$  \_\_\_\_\_



$6 \times 3 =$  \_\_\_\_\_



$6 \times 4 =$  \_\_\_\_\_