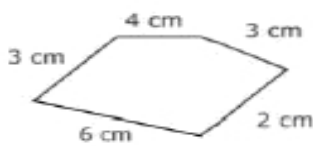


Name \_\_\_\_\_

Date \_\_\_\_\_

### Unique Area and Perimeter

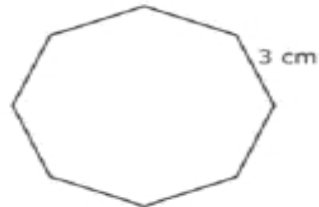
Find the area (A) and/or perimeter (P) of given figures.



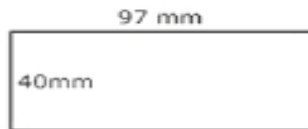
1. P = \_\_\_\_\_



2. A = \_\_\_\_\_  
P = \_\_\_\_\_



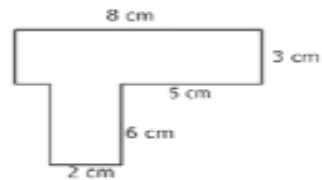
3. P = \_\_\_\_\_



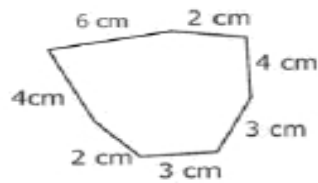
4. A = \_\_\_\_\_  
P = \_\_\_\_\_



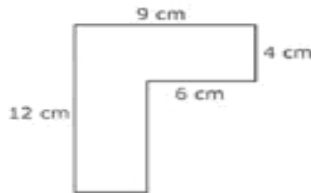
5. A = \_\_\_\_\_  
P = \_\_\_\_\_



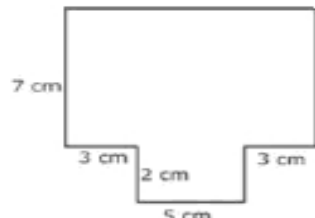
6. A = \_\_\_\_\_  
P = \_\_\_\_\_



7. P = \_\_\_\_\_



8. A = \_\_\_\_\_  
P = \_\_\_\_\_



9. A = \_\_\_\_\_  
P = \_\_\_\_\_