

Name : _____

Score : _____

Teacher : _____

Date : _____

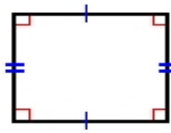
Identify the Type For Each Qualrilateral.

1)



Type: _____

2)



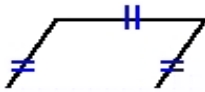
Type: _____

3)



Type: _____

4)




Type: _____

5)



Type: _____

6)



Type: _____

_____ in each bus ?

7) Mike bought four new baseball trading cards to add to his collection. The next day his dog ate half of his collection. There are now only twenty-nine cards left. How many cards did Mike start with ?

8) Sara had 207 dollars to spend on 9 books. After buying them she had 18 dollars. How much did each book cost ?