






### 3D Shape Properties

Name \_\_\_\_\_

Write a description for each shape. Think carefully about their properties.

|   |  |
|---|--|
|    | This 3D shape is a _____<br>It has _____ |
|    | This 3D shape is a _____<br>It has _____ |
|   | This 3D shape is a _____<br>It has _____ |
|  | This 3D shape is a _____<br>It has _____ |
|  | This 3D shape is a _____<br>It has _____ |

**Cube**

**Cylinder**

**Cuboid**

**Cone**

**Sphere**