






# 1ST GRADE SCIENCE



count the number of legs and wings of each animal.  
How does it move (fly, run, swim or crawl)?

Name: \_\_\_\_\_

Date: \_\_\_\_\_

| Animal  | Number of legs | Number of wings | How does it move? |
|---|----------------|-----------------|-------------------|
|    | _____          | _____           | _____             |
|    | _____          | _____           | _____             |
|   | _____          | _____           | _____             |
|  | _____          | _____           | _____             |
|  | _____          | _____           | _____             |
|  | _____          | _____           | _____             |