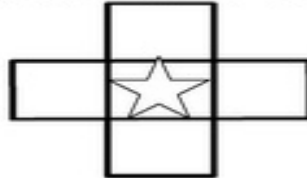
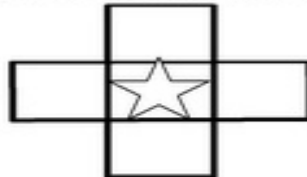


Pick a number that is greater than 10 and less than 100. Write the number inside of the star. Then show what is one less, one more, ten more, and ten less than the number.



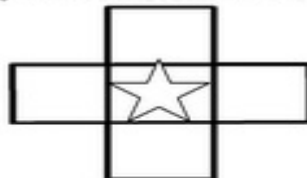
What strategies did you use to find what is 1 less, 1 more, 10 more, and 10 less than the number?

Pick a number that is greater than 10 and less than 100. Write the number inside of the star. Then show what is one less, one more, ten more, and ten less than the number.



What strategies did you use to find what is 1 less, 1 more, 10 more, and 10 less than the number?

Pick a number that is greater than 10 and less than 100. Write the number inside of the star. Then show what is one less, one more, ten more, and ten less than the number.



What strategies did you use to find what is 1 less, 1 more, 10 more, and 10 less than the number?