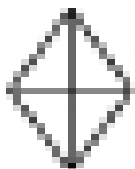
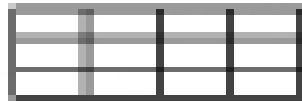
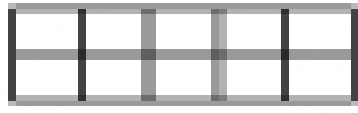
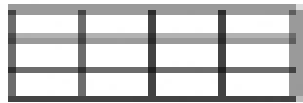




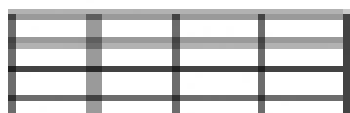
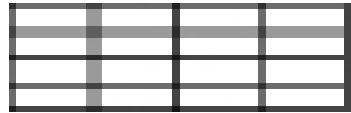
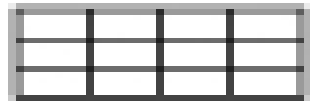





**Shade and Reduce Fractions #4:** Name: \_\_\_\_\_

Shade or cover the portions of each figure to represent the fraction. Then finish the reduced fraction.

$\frac{2}{4} = \frac{\quad}{\quad}$ 	$\frac{8}{12} = \frac{\quad}{\quad}$ 	$\frac{2}{10} = \frac{\quad}{\quad}$ 
$\frac{8}{12} = \frac{\quad}{\quad}$ 	$\frac{6}{8} = \frac{\quad}{\quad}$ 	$\frac{4}{10} = \frac{\quad}{\quad}$ 
$\frac{12}{16} = \frac{\quad}{\quad}$ 	$\frac{3}{9} = \frac{\quad}{\quad}$ 	$\frac{12}{16} = \frac{\quad}{\quad}$ 
$\frac{4}{16} = \frac{\quad}{\quad}$ 	$\frac{10}{12} = \frac{\quad}{\quad}$ 	$\frac{2}{14} = \frac{\quad}{\quad}$ 
$\frac{2}{8} = \frac{\quad}{\quad}$ 	$\frac{2}{16} = \frac{\quad}{\quad}$ 	$\frac{8}{12} = \frac{\quad}{\quad}$ 