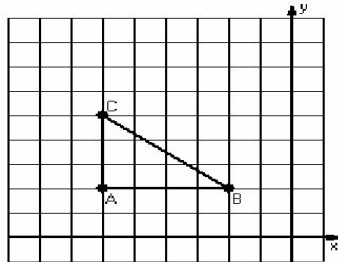


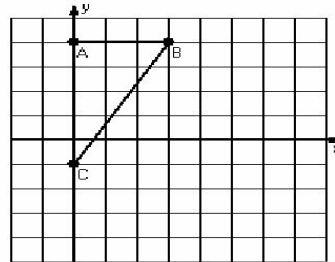
## Reflections (F)

Instructions: Draw and label the reflected image for each triangle.  
Draw the reflection line.

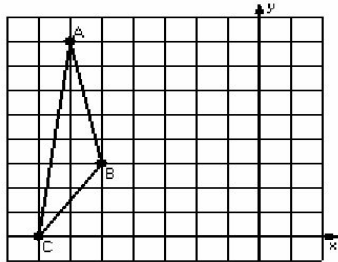
1) Reflection  $x = -3$



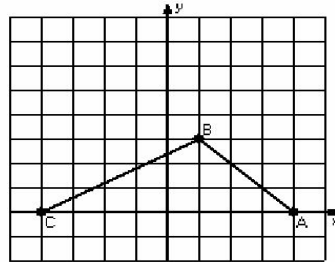
2) Reflection  $y = 0$



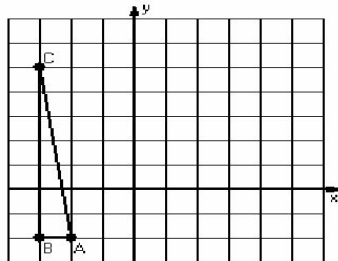
3) Reflection  $x = -4$



4) Reflection  $y = 1$



5) Reflection  $x = 1$



6) Reflection  $y = 4$

