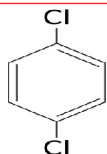


ORGANIC COMPOUNDS

Name: _____

Date: _____

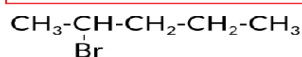
1



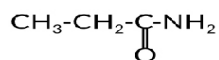
2



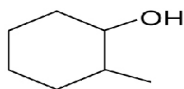
4



5



3



6



Draw the structural formula of the following organic compounds in other paper.

1 Iodobenzene

4 Trimethylamine

2 m-bromophenol

5 Pentane

3 p-bromotoluene

6 2-ethyl-1-pentanol