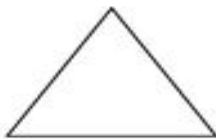


Name: _____
Date: _____

Subject: Year 3 Numeracy
Sheet: 2D shapes

2D shapes

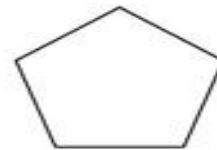
Name each shape and count how many sides each shape has got.



name _____
sides _____



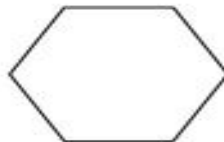
name _____
sides _____



name _____
sides _____



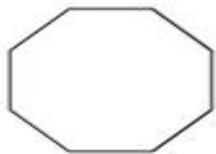
name _____
sides _____



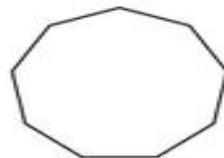
name _____
sides _____



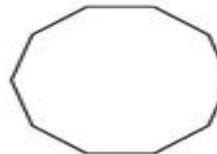
name _____
sides _____



name _____
sides _____



name _____
sides _____



name _____
sides _____