


Time _____


Date _____

Shade in the fraction shown, then write use $>$, $<$, or $=$ to compare the two fractions.

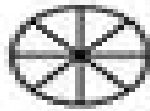


$\frac{2}{2}$

$\frac{1}{4}$

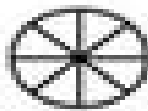


$\frac{1}{2}$



$\frac{2}{6}$

$\frac{1}{5}$



$\frac{5}{6}$

