

Name: _____


Date: _____



Adding Up Sweets ①


Directions: Add the equal groups of sweets to find the total number. Write a repeated addition sentence to match.

1. 2 groups of 4 candies




_____ + _____ = _____

2. 3 groups of 2 candies




_____ + _____ + _____ = _____

3. 2 groups of 1 candy



_____ + _____ = _____

4. 3 groups of 3 candies



_____ + _____ + _____ = _____

5. 5 groups of 4 candies




_____ + _____ + _____ + _____ + _____ = _____

6. 4 groups of 7 candies



_____ + _____ + _____ + _____ = _____

7. 6 groups of 5 candies



_____ + _____ + _____ + _____ + _____ + _____ = _____