


Name: \_\_\_\_\_

CCSS 2.MD.1 Measure the length of an object .....primer


## Measurement

 Directions: How many ladybugs long is each object?

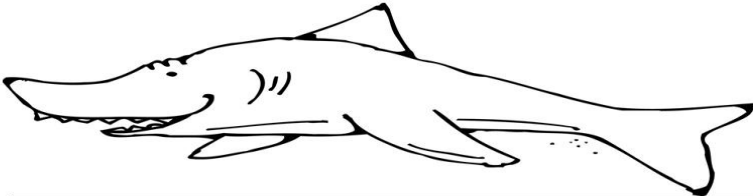
1. \_\_\_\_\_ ladybugs long



2. \_\_\_\_\_ ladybugs long



3. \_\_\_\_\_ ladybugs long



Graphics/fonts copyright DJ Inkers. www.djinkers.com