


**Mass**

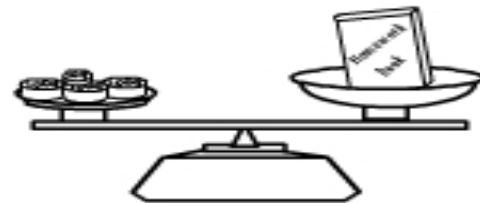
Name: \_\_\_\_\_

Measuring mass in grams and kilograms.

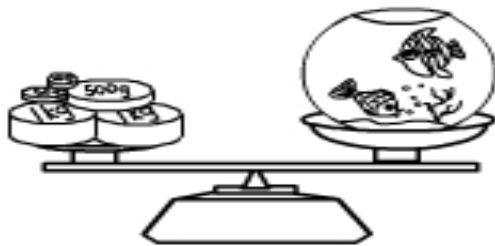
These are the masses we used to measure objects on the balancing scales.

**1 kg****500g****100g****50g****10g****5g**

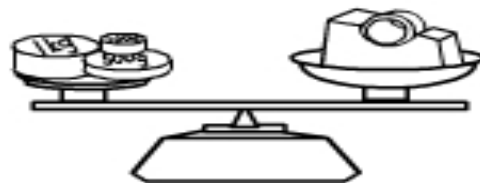
The teddy bear weighs \_\_\_\_\_ g



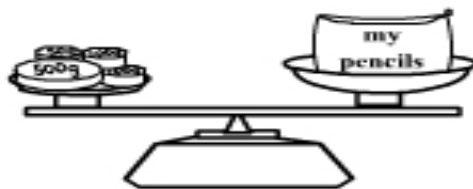
The book weighs \_\_\_\_\_ g



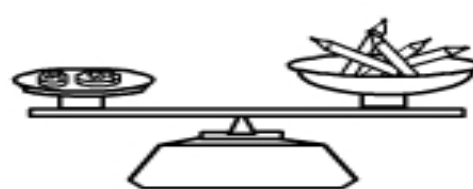
The fishtank weighs \_\_\_\_\_ g



The tape dispenser weighs \_\_\_\_\_ g



The pencilcase weighs \_\_\_\_\_ g



The pencils weighs \_\_\_\_\_ g