



Name _____

Date _____




$$3 \times 2 = \square$$

(3 sets of 2)



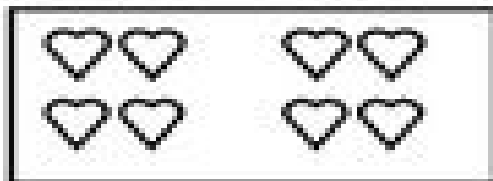
$$2 \times 3 = \square$$

(2 sets of 3)



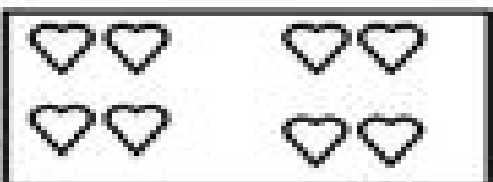
$$2 \times 2 = \square$$

(2 sets of 2)



$$2 \times 4 = \square$$

(2 sets of 4)



$$4 \times 2 = \square$$

(4 sets of 2)