



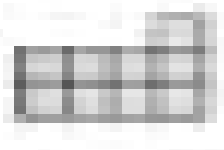
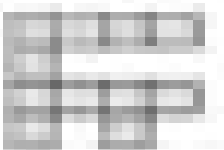









QUESTION

-  $\frac{1}{3}$
-  $\frac{2}{3}$
-  $\frac{4}{9}$

-  $\frac{2}{3}$
-  $\frac{5}{9}$
-  $\frac{4}{9}$

-  $\frac{2}{3}$
-  $\frac{2}{3}$
-  $\frac{2}{3}$

-  $\frac{2}{3}$
-  $\frac{2}{3}$
-  $\frac{2}{3}$

-  $\frac{2}{3}$
-  $\frac{2}{3}$
-  $\frac{2}{3}$