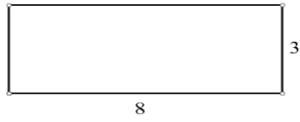


Perimeter & Area Worksheet I

For each of the following plane figures, find the
Assume all units are in cm.

1)



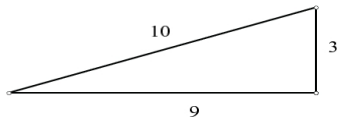
Perimeter &

Area

Perimeter

Area

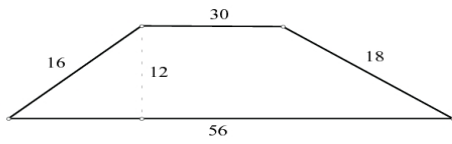
2)



Perimeter

Area

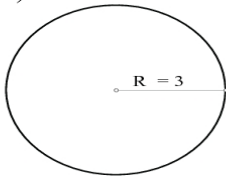
3)



Perimeter

Area

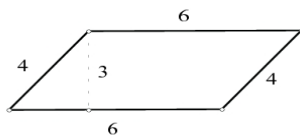
4)



Circumference

Area

5)



Perimeter

Area