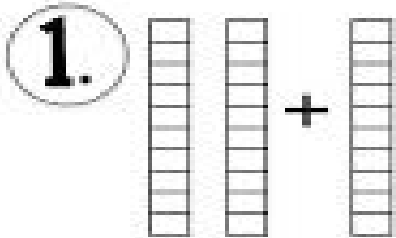

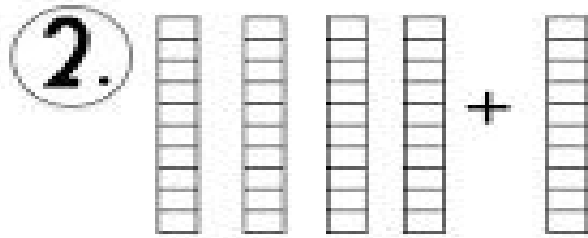



Adding Ten



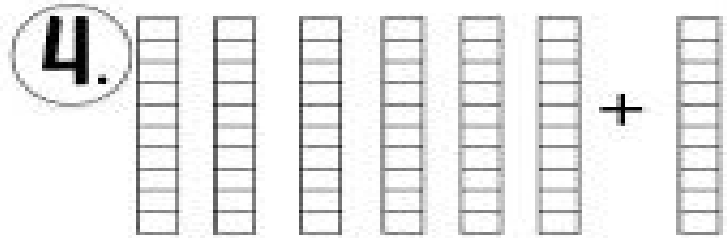
_____ + _____ = _____



_____ + _____ = _____



_____ + _____ = _____



_____ + _____ = _____

5. $50 + 10 = \square$

$80 + 10 = \square$

$10 + 10 = \square$

$70 + 10 = \square$